

Bellwork

1. What is the definition of midpoint?
2. What is the definition of an angle bisector?
3. Does having an angle bisected make the sides that form the angle congruent?

Similar Figures

Definitions:

Similar Figures - are figures with the same shape, but are smaller or larger in size.

Scale Factor - the ratio of the side lengths of two similar figures.

Similarity Statements

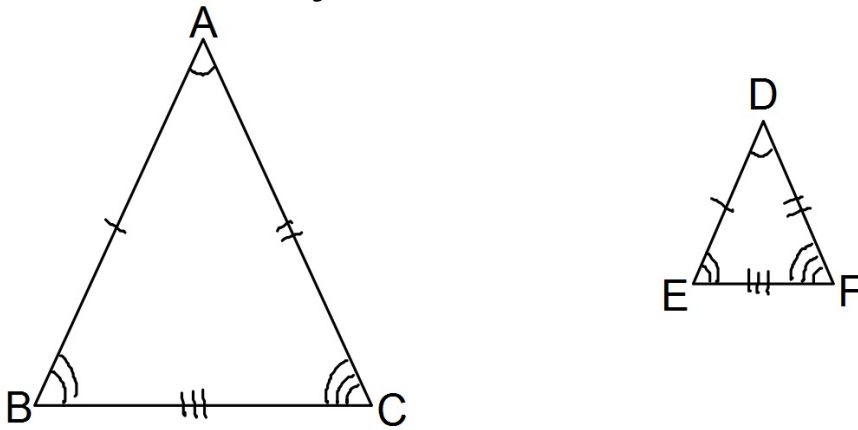
Requirements:

1. Show that all the angles are congruent.
2. Show that the ratio of corresponding sides is = in all sets of corresponding sides.

Algebraically:

1. Write congruence statements for each of 3 pairs of congruent angle pairs.
2. Set up 4 ratios... 1st, 2nd, and 3rd will show the corresponding sides, and the 4th will show the equivalence of the ratios reduced.

Similarity Statements Visually



List ALL angle pairs that are congruent, and show that the ratio of ALL side pairs are equal.

Show that $\triangle ABC \cong \triangle DEF$

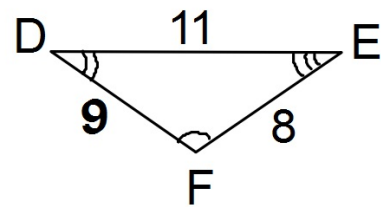
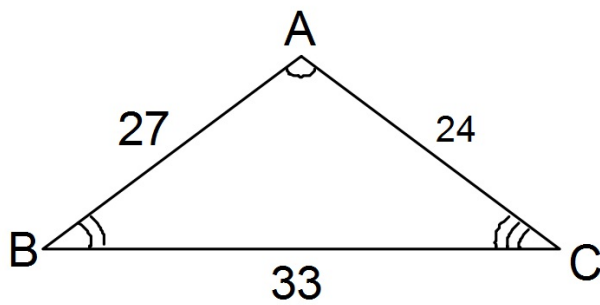
$$\angle A \cong \angle D$$

$$\angle B \cong \angle E$$

$$\angle C \cong \angle F$$

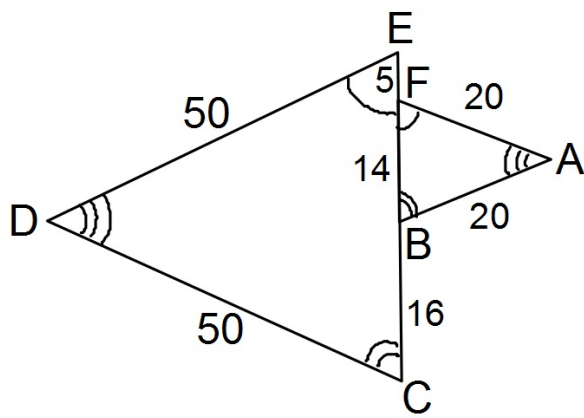
$$\frac{AB}{DE} = \frac{BC}{EF} = \frac{AC}{DF} = \text{A simplified fraction!}$$

Example



1. Show that $\triangle ABC \sim \triangle FDE$.

Example



2. Show that $\triangle CDE \sim \triangle BAF$.