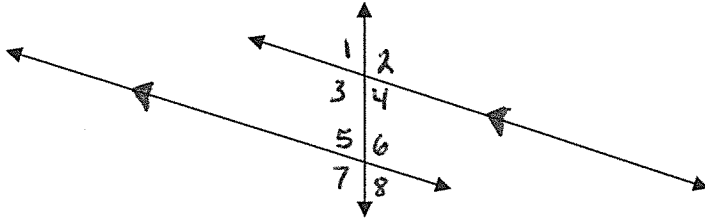


Parallel Lines
Unit 4: Similarities



Identify each of the following:

1. List all the pairs of Corresponding Angles.

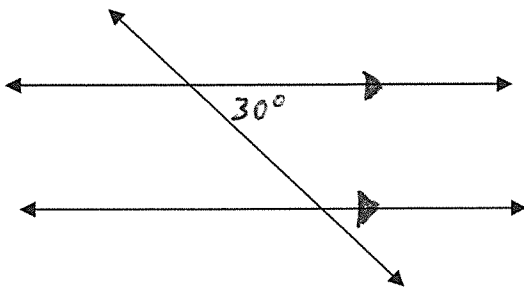
2. List all the pairs of Alternate Interior Angles.

3. List all the pairs of Alternate Exterior Angles.

4. List the Same-Side Interior Angles.

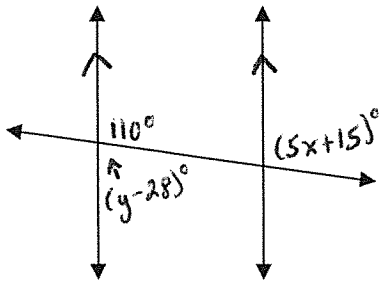
5. List all of the Vertical Angles.

6. Find the measure of each of the missing angles.

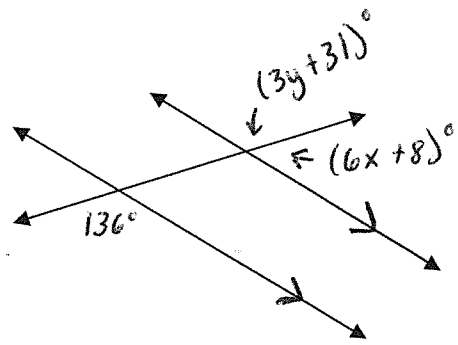


Find the value of variables:

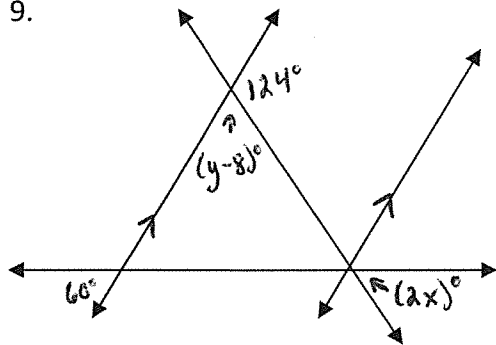
7.



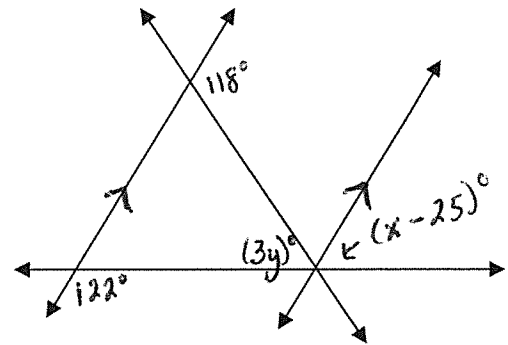
8.



9.



10.



Write a Congruence Statement for the following Triangles:

11.

