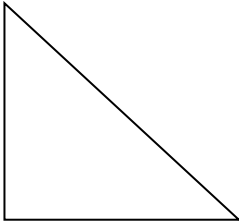


Right Triangles: The Basic Six Trigonometric Functions

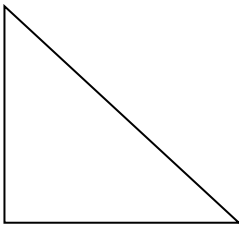
Unit 5: Right Triangles and Trigonometry

Evaluate the six trigonometric functions for the regular right triangle for $\angle A$.

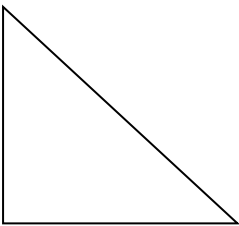
1. $a = 10$ & $b = 24$



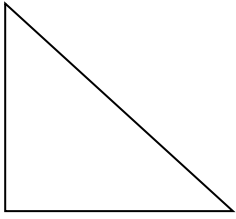
2. $a = 3$ & $b = 8$



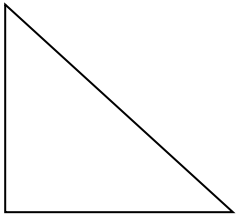
3. $b = 8$ & $c = 11$



4. $a = 7$ & $c = 15$



5. $a = 9$ & $c = 14$



6. $b = 8$ & $c = 2\sqrt{17}$

