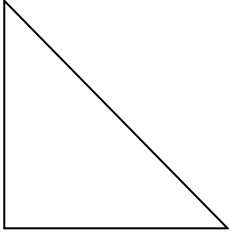


Right Triangles: The Basic Six Trigonometric Functions - DAY 2

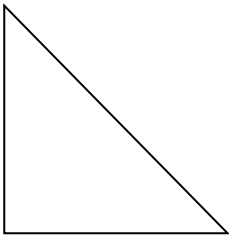
Unit 5: Right Triangles and Trigonometry

Evaluate the six trigonometric functions for the regular right triangle for $\angle A$.

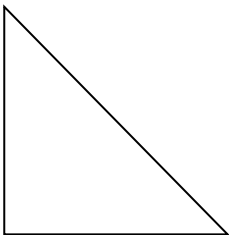
1. $a = 3$ & $b = 4$



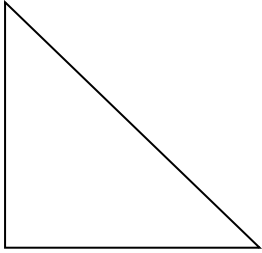
2. $b = 15$ & $c = 17$



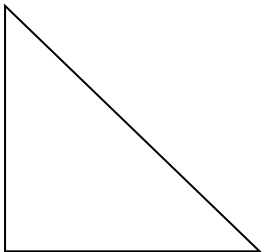
3. $a = 5$ & $c = 5\sqrt{2}$



4. $a = 4$ & $c = 7$



5. $a = 5$ & $b = 12$



6. $a = 4$ & $c = 9$

