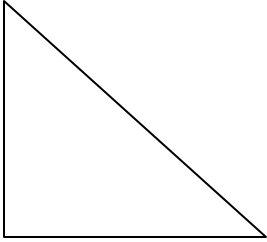


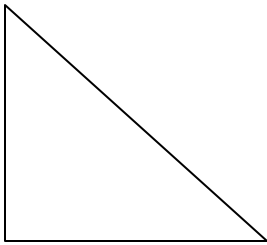
Solving Right Triangles – Day 2
Unit 5: Right Triangles and Trigonometry

Solve the following triangles given the provided information:

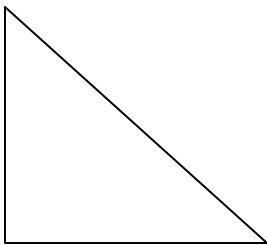
1. $\angle B = 46^\circ$ & $a = 6$



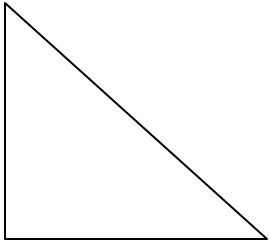
2. $\angle A = 35^\circ$ & $b = 11$



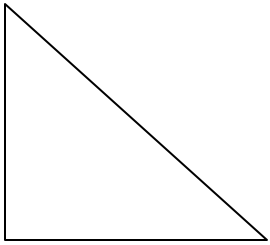
3. $\angle B = 52^\circ$ & $c = 25$



4. $a = 5$ & $b = 12$



5. $a = 7$ & $c = 19$



6. $b = 13$ & $c = 23$

