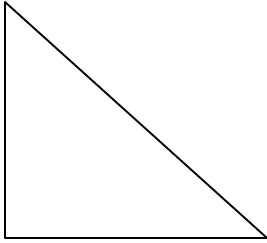


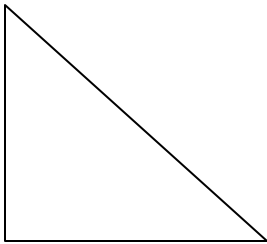
**Solving Right Triangles – Day 3**  
Unit 5: Right Triangles and Trigonometry

**Solve the following triangles given the provided information:**

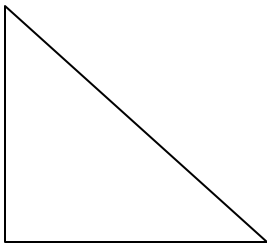
1.  $\angle A = 15^\circ$  &  $c = 36$



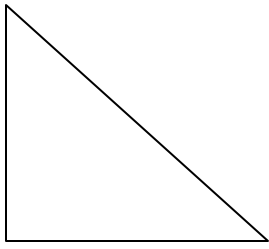
2.  $\angle B = 75^\circ$  &  $a = 7$



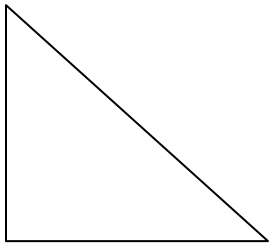
3.  $\angle A = 37^\circ$  &  $b = 18$



4.  $a = 15$  &  $b = 23$



5.  $a = 13$  &  $c = 74$



6.  $b = 37$  &  $c = 100$

